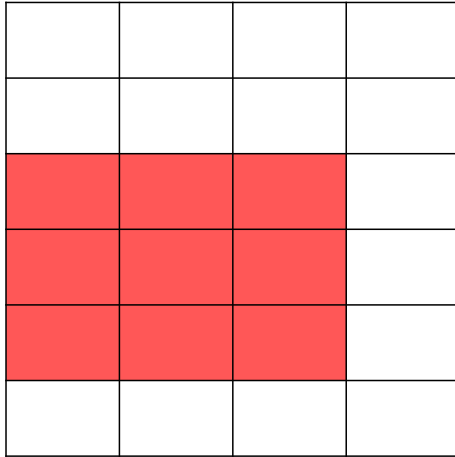



Datum: 28.4.2021.


1. Oboji zadani broj kvadrata. Napiši umnožak.



$$3 \cdot 3 = 9$$




$$5 \cdot 2 =$$



$$4 \cdot 5 =$$


## 2. Zaokruži i izračunaj:




$$2 + 2 = 2 \cdot 2 = 4$$



$$4 + 4 = \underline{\hspace{2cm}}$$



$$2 + 2 + 2 = \underline{\hspace{2cm}}$$



$$6 + 6 = \underline{\hspace{2cm}}$$

**3. Zbroj jednakih brojeva napiši u obliku množenja:**

$$3 + 3 + 3 = 3 \cdot 3 = 9$$

$$2 + 2 + 2 + 2 + 2 = \underline{\hspace{10em}}$$

$$6 + 6 + 6 = \underline{\hspace{10em}}$$

$$4 + 4 + 4 + 4 + 4 = \underline{\hspace{10em}}$$

$$8 + 8 = \underline{\hspace{10em}}$$

$$7+7 + 7 = \underline{\hspace{10em}}$$