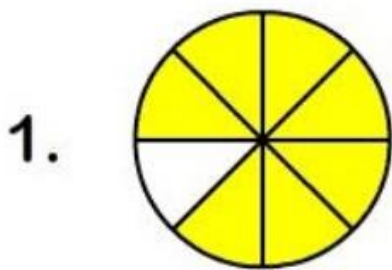


Razlomci


Zaokruži razlomak koji prikazuje koji dio kruga je obojan.



$\frac{7}{8}$

$\frac{5}{7}$


$\frac{6}{8}$



$\frac{1}{2}$

$\frac{4}{6}$

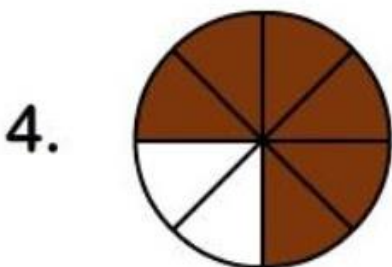
$\frac{2}{3}$



$\frac{3}{4}$

$\frac{2}{3}$

$\frac{3}{6}$



$\frac{2}{3}$

$\frac{6}{8}$

$\frac{1}{2}$